

OSPREY SIGNPOST 35

LITERACY TASK

Be the teacher - Use the mark scheme opposite to help edit the work below.
Don't forget to give it 2 stars and a wish.

MATHS TASK

Have a go at the 'Weekly Skills Check' below. Don't worry if you find some of the questions a bit tricky.
Please let me know which ones you needed help with.

WELLBEING WEDNESDAY

Have a go at some calming yoga on 5-a-day or do some relaxing colouring.

Mark scheme:

Capital letter needed - underline e.g.: f

Doesn't need a capital letter – cross through e.g.: ~~R~~

Full stop needed .

Spelling incorrect sp. pritty (and to copy at bottom of the page)

Wrong punctuation ! ?

Doesn't make sense I didn't do nothing

Missing word ^

Spanish TASK

Listen to some Spanish songs on rockalingua or basho & friends. Then have a look at the revision sheets below.



Upload your work to STARZ or ask a parent to email your work for Miss McGinty to mark@meldreth.cambs.sch.uk

Links:

All linked resources can be found on the 'Home Learning Videos' page, under Osprey on the school website.

Home Learning Videos -

http://www.meldreth.cambs.sch.uk/web/home_learning_videos/467114

Literacy – Imagine you are the teacher, mark the paragraph below, using the marks we use at school (on previous page) to help you.

last night my father mad us a spaghetti dinner. He macks
the best meatballs in the world! I ate lots of spaghetti. My
brother spill sauce on his white shirt. Whee all laughed. I love
when My dad makes spaghetti

Give this child 2 stars (things they did well) and a wish (something they could do better next time):


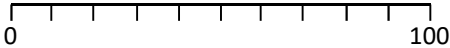
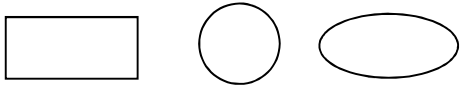
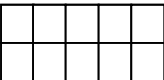
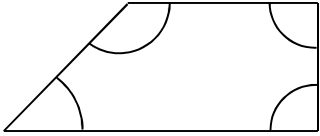
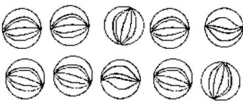
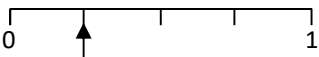
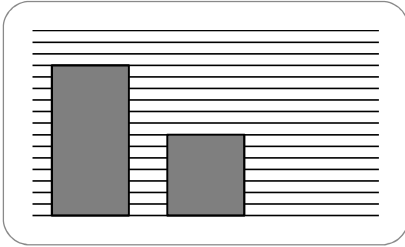

★ _____

★ _____

 _____

Maths – Weekly Skills Check

(The grey highlighted boxes show fractions and statistics, which we have not yet covered).

A: Place Value, Add and Subtract		B: Multiply, Divide and Fractions		C: Measure, Geometry and Statistics	
1. What is the missing number? 0 8 16 24 	3:1	11. $27 \div 3 =$	3:10	23. About how long is a kids' cartoon show? a. 15 minutes b. 50 minutes c. 1 hour	3:23
2. What is the 7 worth in this number? 712	3:2	12. $9 \times 4 =$	3:10		
3. Put these in order, smallest first. 241 412 421 142	3:3	13. Use $7 \times 8 = 56$ to solve: — $560 \div 8 =$	3:11	22. Tick the shape which is a face of a cylinder.	3:25
4. Draw an arrow to label 70. 	3:4	14. Eggs come in boxes of 6. I need 27 eggs. How many boxes should I buy?	3:12		
5. Circle all the multiples of 4. 6 8 14 16 22	3:5	15. Shade $\frac{1}{2}$ of this shape? 	3:13	23. How many right angles are in this shape? 	3:26
6. $612 + 100 =$	3:6	16. Circle $\frac{3}{5}$ of the marbles. 	3:14		
7. $682 + 176 =$	3:7	17. What fraction is labelled? 	3:15	24. Favourite football teams: 	3:29
8. Write a sum to check $54 + 18 = 72$. Check: $72 - \square = \square$	3:8	18. $\frac{2}{5} = \frac{?}{?}$ 	3:16		
9. To a number I add 13 then subtract 29. I now have 3. What did I start with?	3:9	19. Subtract the fractions. $\frac{5}{7} - \frac{2}{7}$	3:17		
10. What is the missing number? $212 + \square = 307$	3:9	20. Write the largest fraction. $\frac{1}{8} \quad \frac{3}{8} \quad \frac{2}{8} \quad \frac{5}{8}$	3:18	9 people said 'Man City'. Show this.	3:30
Total (A)		Total (B)		Total (C)	
Test Total (A+B+C)		R (0-9)	Y (10-19)	G (20-25)	

Spanish – Have a go at the two Spanish revision sheets, reminding you of some of the words you have been learning this half term. Remember to listen to some Spanish songs online to help you remember - check out Rockalingua or Basho & friends and have fun!

Un repaso – revision! How much do you remember?

1. Draw a circle around the days of the week, a rectangle around the food items, underline the animals and shade over the colours.
(There are 3 of each)

oveja

martes

verde

sandía

Amarillo

azul

caballo

rana

sábado

manzana

limón


Viernes

2. Draw a little picture of the correct animal or food item next to each word.
3. Can you make an activity like this for someone in your family to help them learn colours, animals or days of the week? Remember there are many Spanish songs online that you can watch to help you learn and remember!

La fruta

A Fill in the price for each fruit.

B Draw the missing fruit and do its price label.



Precio de comidas

Un kilos de uvas	3€,50
Un melón	3€,80
Un kilo de manzanas	3€,20
Un kilo de plátanos	3€
Un kilo de naranjas	2€,50
Una piña	3€,90