

Swift Signpost 21

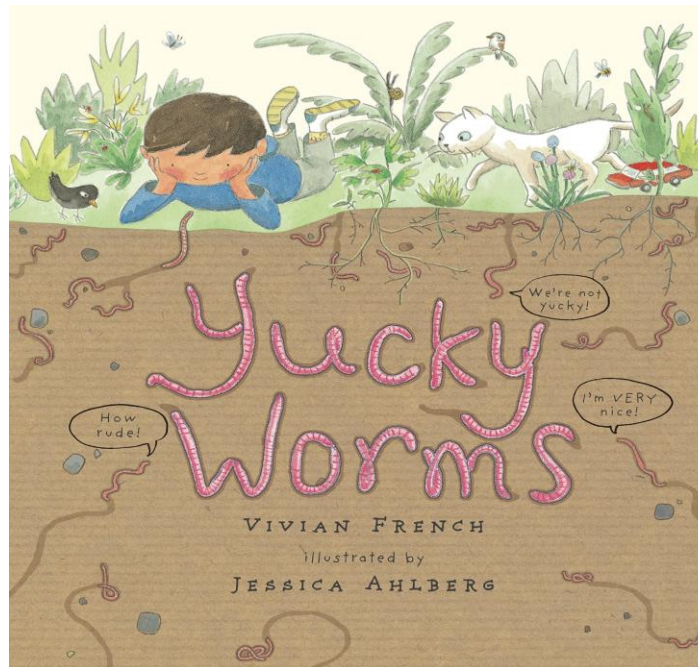
Super Science!

Today your mission is to go on a Spring walk with your adult. During your walk, you will need to look for the signs of Spring. How many of the following can you find?



Bean plant diary challenge

Can you describe how your bean plant has changed in the past week? Add some details to your bean plant diary or take a photo to compare.



Topic/Writing activity

Tomorrow you are going to write your own fact file about worms. To prepare, today you are going to make some notes about what you want to say about worms. You can use the attached sheet or visit the [Woodland Trust](https://www.woodlandtrust.co.uk/). You can do your own google search with an adult or go back and watch Miss Jackson's yucky worms video to find information.

You want to make your fact file interesting. Think about what picture you would like to draw too.

TRICKY WORD SPELLING - Practice writing and reading the following Common Exception Words.

today

where

your

house

school

Ideas for writing trays if you want to use one - practice writing them in sand, foam, flour, soil, paint or rice. Can you think of or write sentences using these words? Examples: **Today** I am going to **your house**. My **school** is fun.

TIME FOR A BIT OF FRESH AIR

Today we are going to do a sensory motor scavenger hunt.

Can you find something...

- To climb
- To play catch with
- To crawl under
- To jump over
- To roll across the ground
- To walk across
- That is heavy
- That is squishy

Reading Corner



Watch the [Alphablocks](#) episode train.

In the episode, which 'ai' words do you see? Make a list or draw pictures.

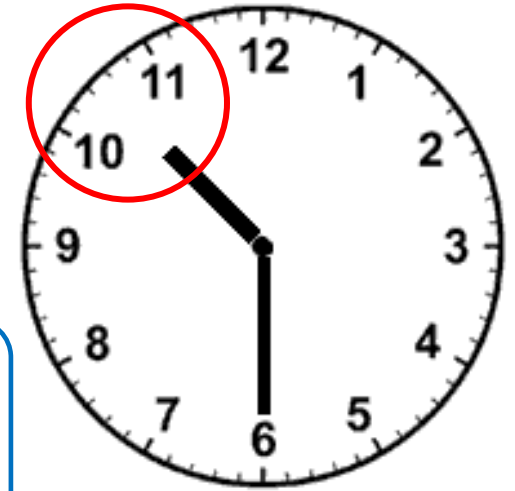
Bonus task - Can you find any other ai words in your house or garden? E.g. drain

MAGNIFICENT MATHS - Time (time to the half hour and hour)

Let me introduce time to the half hour. When the long hand (minute hand) is pointing down towards 6, it means it is **half past the hour**. The hour hand starts to move toward the next hour, which means it sits between two numbers. Look at this clock. The time is **half past ten**, as the hour hand has moved past 10.



Try the activities at the bottom of the signpost.



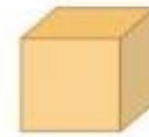
A little bit extra - Visit pbs kids and play [Magical Shape Hunt](#) to develop your knowledge of 3d shapes.



Bonus activity - How many examples of these 3D shapes can you find around your house or garden.



Cylinder



Cube



Rectangular Prism



Sphere



Pyramid




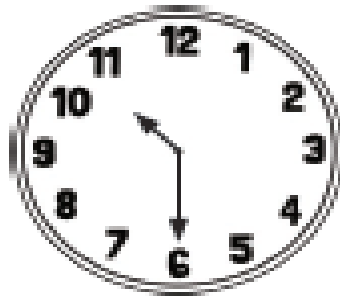
Cone


Show what you know or find out what you can about each of the headings. Try to do some work on each of the tasks but do try **and** do MORE about the one you like the sound of most. **Ask a parent to email your work for Miss Jackson to mark.** cjackson@meldreth.cambs.sch.uk

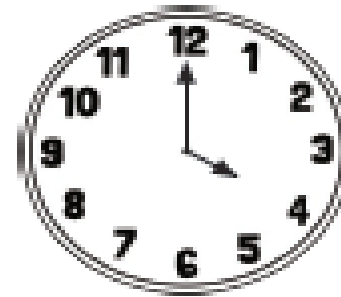
Maths - Time to the half hour and the hour

Activity 1 - Write the times for the clocks below









Activity 2 - Draw the times on the clocks below



9 o'clock



half past 3



5 o'clock



1 o'clock